

Name _____

Lucky Charms Graph Questions



rainbow



heart



star



balloon



horseshoe



clover





Pot o' Gold





moon

1. What shape(s) did you have the **most** of? _____

2. What shape(s) did you have the **least** of? _____

3. Add together  +  = _____


4. Add together  +  = _____

5. Add together  +  = _____

6. How many **total**? _____


Get together with a partner and answer these questions about both graphs.


Who had more  ? _____

Who had more  ? _____

Who had more  ? _____

Who had more  ? _____

Who had less  ? _____

Who had less  ? _____

Who had the biggest total? _____

Who had the smallest total? _____